























### What Comes Next?

 9	<input type="text"/>	 5	<input type="text"/>
 8	<input type="text"/>	 3	<input type="text"/>
 4	<input type="text"/>	 11	<input type="text"/>
 12	<input type="text"/>	 14	<input type="text"/>
 13	<input type="text"/>	 10	<input type="text"/>

### What Comes Before?

 <input type="text"/>	2	 <input type="text"/>	14
 <input type="text"/>	19	 <input type="text"/>	13
 <input type="text"/>	5	 <input type="text"/>	16
 <input type="text"/>	8	 <input type="text"/>	11
 <input type="text"/>	17	 <input type="text"/>	6

### What comes after?

 6	 11	 5	 8
 3	 14	 18	 12
 7	 9	 13	 2

before

between

after

<input type="text"/> 6	7 <input type="text"/> 9	3 <input type="text"/>
<input type="text"/> 2	2 <input type="text"/> 4	8 <input type="text"/>
<input type="text"/> 5	1 <input type="text"/> 3	6 <input type="text"/>
<input type="text"/> 3	4 <input type="text"/> 6	1 <input type="text"/>
<input type="text"/> 7	5 <input type="text"/> 7	4 <input type="text"/>

### Which Number Comes After

Write the number that comes after the given number.









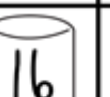









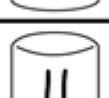

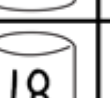











 11	---	 13	---
 14	---	 16	---
 18	---	 20	---
 5	---	 9	---

### What Comes Between?



Directions: Write the missing number.

 17		 19	 13		 15
 14		 16	 11		 13
 18		 20	 12		 14
 16		 18	 15		 17
 10		 11	 19		 21

created by Kerry Anille



Name \_\_\_\_\_






# Missing Numbers 1 to 30

Write the numbers.

1				
	7			10
11		13		
		18	19	
	22	23		
26				30

© Crazy About Learning madebyteachers.com/vendor/crazy-about-learning

Count and match with correct number



6  
8  
4  
7  
10

www.megaworkbook.com

Count the items and write in the box:



www.megaworkbook.com

Name: \_\_\_\_\_

Greater Than / Less Than

Compare the groups in each row and write the correct sign in the middle.



--	--	--

--	--	--

--	--	--

--	--	--

Copyright www.mylteachingstation.com

Early Childhood Educational Resources

Teaching Station



Count the pictures and write the correct sign < > in each circle.

Row 1: 5 birds on the left, 6 birds on the right, and a circle in the center.

Row 2: 8 birds on the left, 6 birds on the right, and a circle in the center.

Row 3: 4 birds on the left, 8 birds on the right, and a circle in the center.

Row 4: 9 birds on the left, 1 bird on the right, and a circle in the center.

Row 5: 7 birds on the left, 3 birds on the right, and a circle in the center.

Row 6: 3 birds on the left, 6 birds on the right, and a circle in the center.